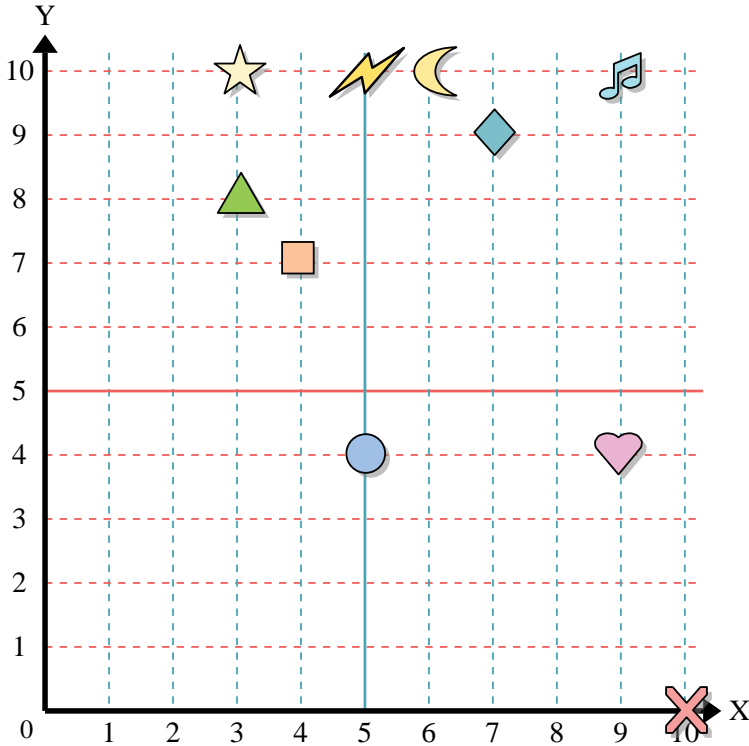




Use the grid below to determine the coordinates where each figure is located.



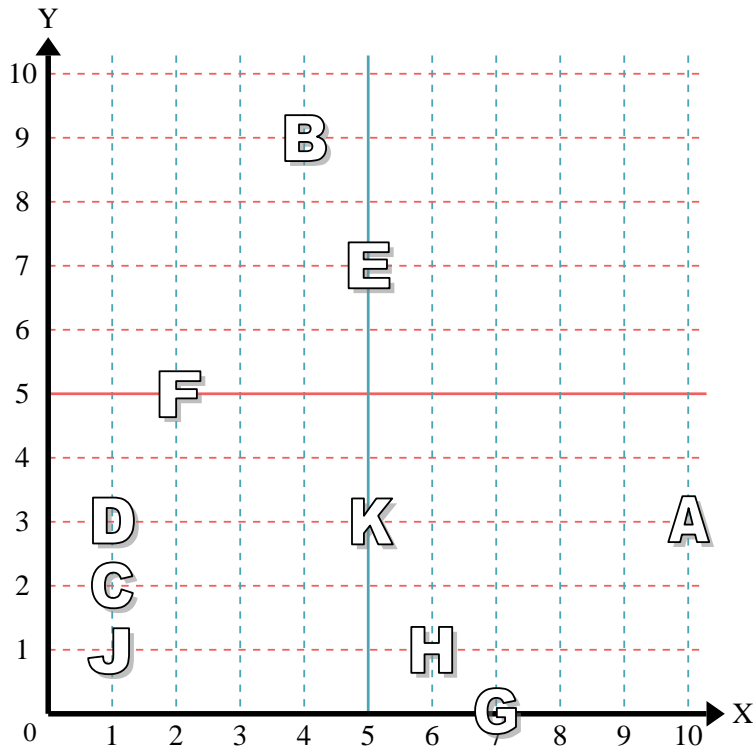
- 1) Star _____
- 2) Lightning _____
- 3) Circle _____
- 4) Heart _____
- 5) Cross _____
- 6) Triangle _____
- 7) Moon _____
- 8) Square _____
- 9) Diamond _____
- 10) Music Note _____

Answers

- 1. _____
- 2. _____
- 3. _____
- 4. _____
- 5. _____
- 6. _____
- 7. _____
- 8. _____
- 9. _____
- 10. _____
- 11. _____
- 12. _____
- 13. _____
- 14. _____
- 15. _____
- 16. _____
- 17. _____
- 18. _____
- 19. _____
- 20. _____

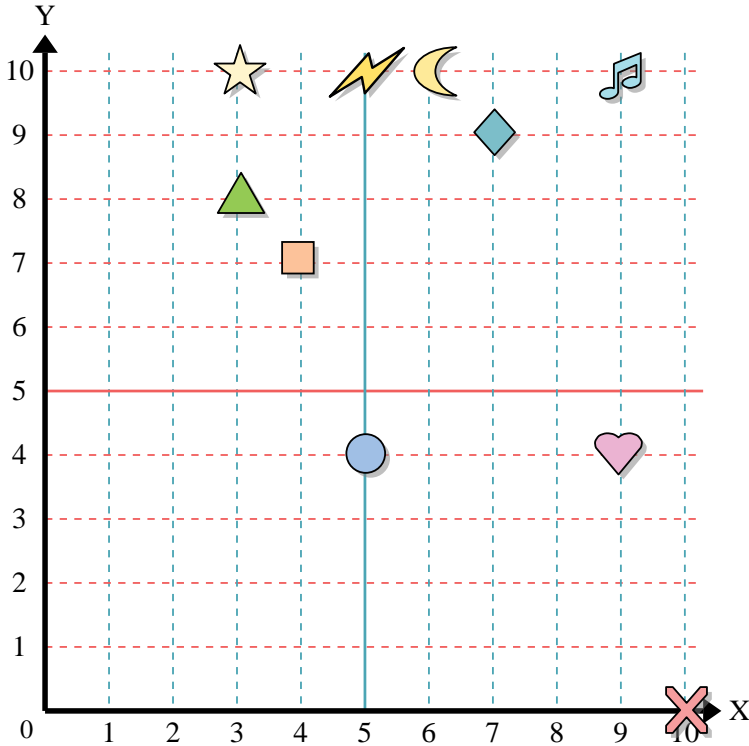
Determine which letter is at each coordinate using the grid below.

- 11) (5,3) _____
- 12) (1,2) _____
- 13) (5,7) _____
- 14) (4,9) _____
- 15) (1,3) _____
- 16) (2,5) _____
- 17) (1,1) _____
- 18) (6,1) _____
- 19) (10,3) _____
- 20) (7,0) _____





Use the grid below to determine the coordinates where each figure is located.



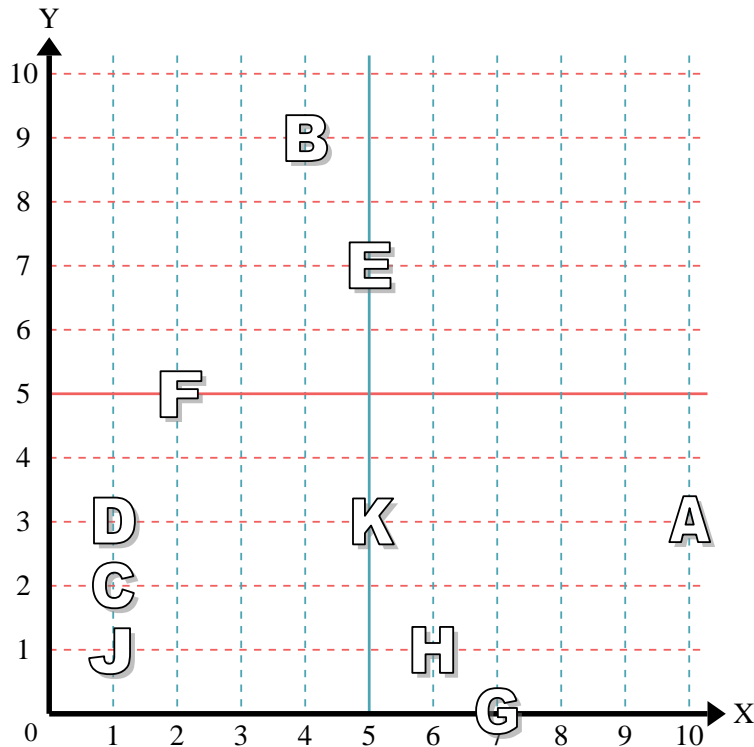
- 1) Star (3, 10)
- 2) Lightning (5, 10)
- 3) Circle (5, 4)
- 4) Heart (9, 4)
- 5) Cross (10, 0)
- 6) Triangle (3, 8)
- 7) Moon (6, 10)
- 8) Square (4, 7)
- 9) Diamond (7, 9)
- 10) Music Note (9, 10)

Answers

- 1. (3, 10)
- 2. (5, 10)
- 3. (5, 4)
- 4. (9, 4)
- 5. (10, 0)
- 6. (3, 8)
- 7. (6, 10)
- 8. (4, 7)
- 9. (7, 9)
- 10. (9, 10)

Determine which letter is at each coordinate using the grid below.

- 11) (5,3) K
- 12) (1,2) C
- 13) (5,7) E
- 14) (4,9) B
- 15) (1,3) D
- 16) (2,5) F
- 17) (1,1) J
- 18) (6,1) H
- 19) (10,3) A
- 20) (7,0) G



- 11. K
- 12. C
- 13. E
- 14. B
- 15. D
- 16. F
- 17. J
- 18. H
- 19. A
- 20. G